



**THIRD SPACE  
LEARNING**

# Pyramid Shape Worksheet

**Geometry**

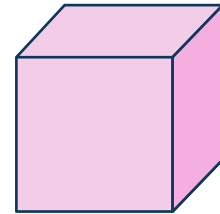
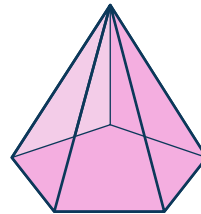
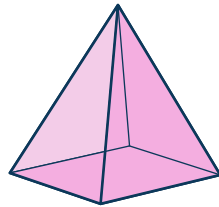
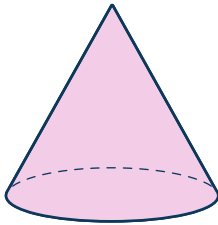
**Grades 1 to 3**

## Skill Questions

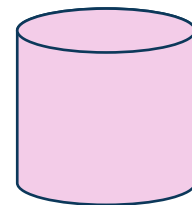
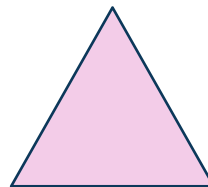
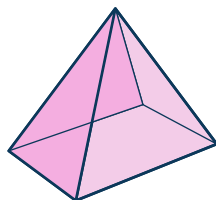
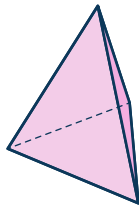
Name: .....

Date: .....

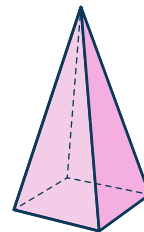
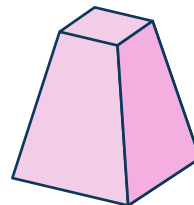
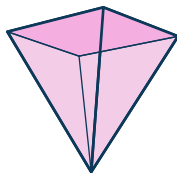
1 Circle the pyramids.



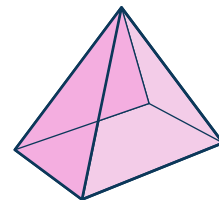
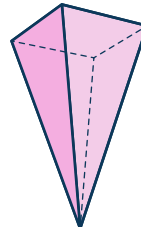
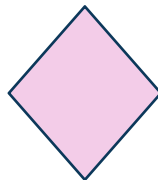
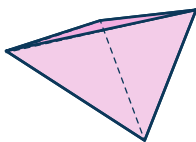
2 Circle the pyramids.



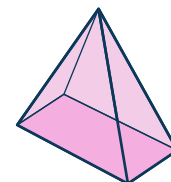
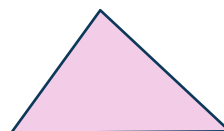
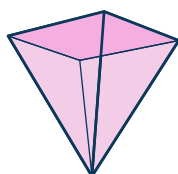
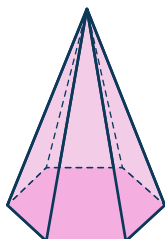
3 Circle the pyramids.



4 Cross out the shape that is NOT a pyramid.




5 Cross out the shape that is NOT a pyramid.




## Pyramid Shape Worksheet | Grades 1 to 3

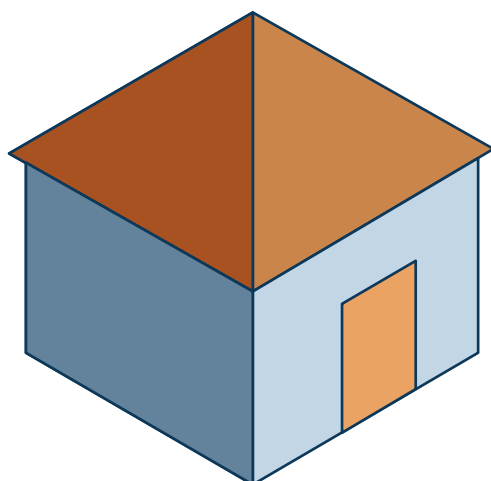
6 Is each part a pyramid? Label each 'yes' or 'no.'



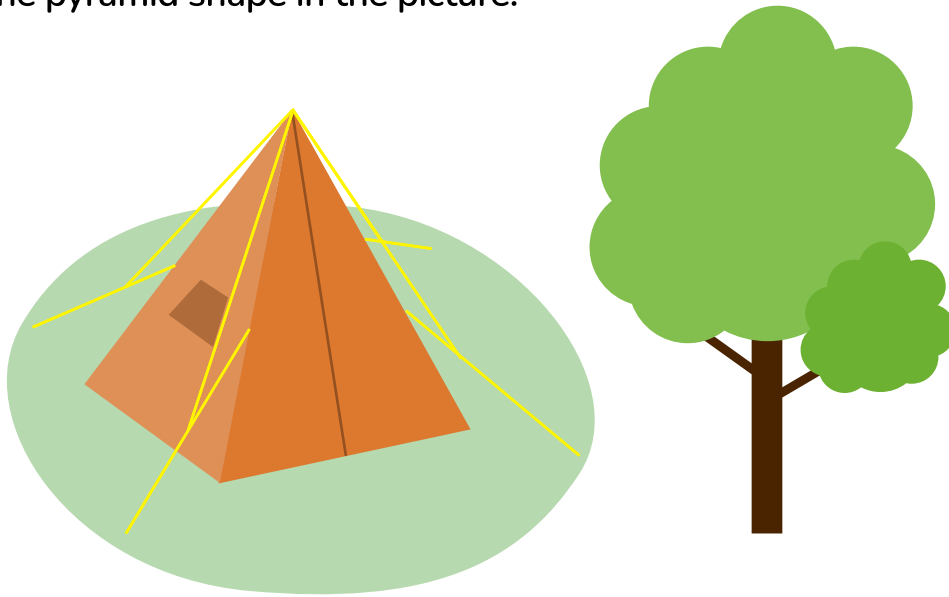
7 Is each part a pyramid? Label each 'yes' or 'no.'



8 Circle the pyramid shape in the picture.




9 Circle the pyramid shape in the picture.




---

10 Circle the pyramid shape in the picture.



## Applied Questions

11



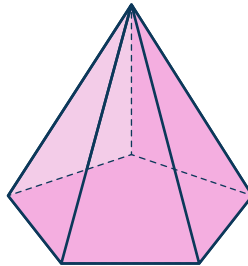
Julie says the tent is a pyramid shape. Is Julie correct? Why or why not?

---

---

12

Circle is OR is not and then complete the sentence.



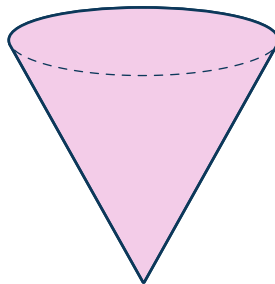
This shape IS / IS NOT a pyramid, because

---

---

13

Circle is OR is not and then complete the sentence.



This shape IS / IS NOT a pyramid, because

---

---

**14** Marco gives clues about a shape.

- The shape has a point at the top
- The shape is flat
- The shape has 3 sides

Is Marco describing a pyramid? Why or why not?

---

---

---

**15** Jayce is answering questions about a shape.

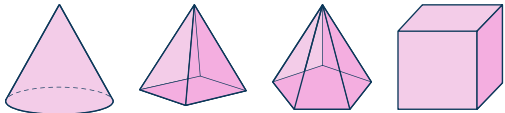
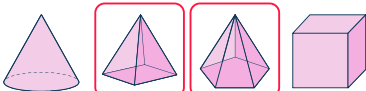
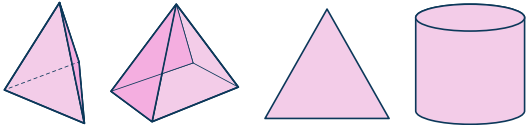
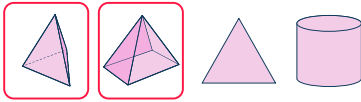
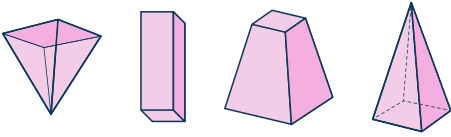
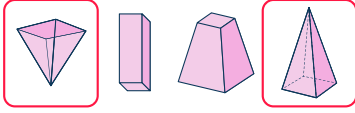
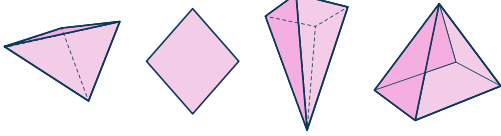
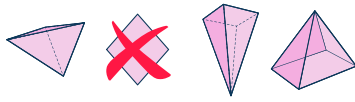
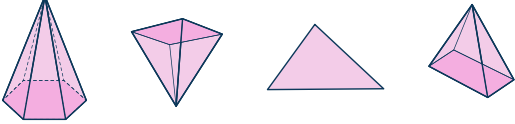
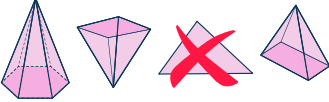

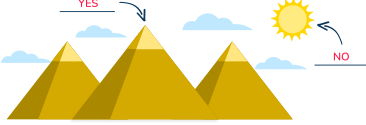
- Does it have one point at the top? Yes.
- Does it have round sides? No.
- Is it flat? No.

Could the shape be a pyramid? Why or why not?

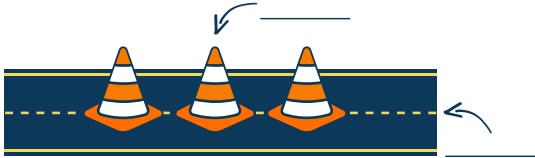
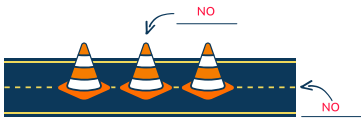
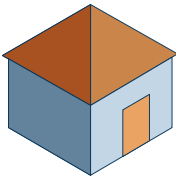
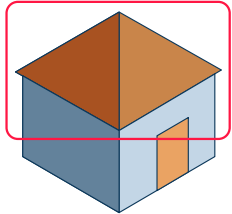
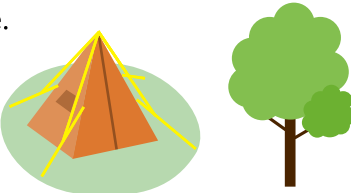
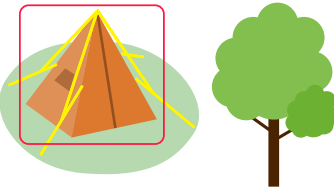

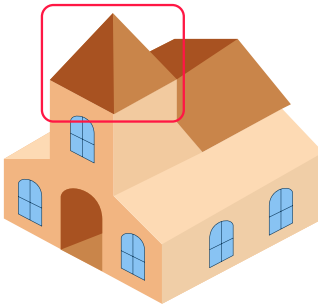

---

---

## Answers

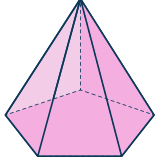
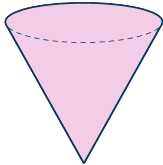
Question number	Question	Answers	Standard
1	Circle the pyramids. 		1.G.A.1
2	Circle the pyramids. 		1.G.A.1
3	Circle the pyramids. 		1.G.A.1
4	Cross out the shape that is NOT a pyramid. 		1.G.A.1
5	Cross out the shape that is NOT a pyramid. 		1.G.A.1
6	Is each part a pyramid? Label each 'yes' or 'no.' 		1.G.A.1

# Pyramid Shape Worksheet | Grades 1 to 3 | Answers

Question number	Question	Answers	Standard
7	Is each part a pyramid? Label each 'yes' or 'no.' 		1.G.A.1
8	Circle the pyramid shape in the picture. 		1.G.A.1 1.G.A.2
9	Circle the pyramid shape in the picture. 		1.G.A.2
10	Circle the pyramid shape in the picture. 		1.G.A.1 1.G.A.2
11	 Julie says the tent is a pyramid shape. Is Julie correct? Why or why not?	<i>Explanations will vary.</i>  Example answer: No, Julie is wrong because the tent has two points on the top.	1.G.A.1



## Pyramid Shape Worksheet | Grades 1 to 3 | Answers




Question number	Question	Answers	Standard
12	<p>Circle <b>is</b> OR <b>is not</b> and then complete the sentence.</p>  <p>This shape <b>IS</b> / <b>IS NOT</b> a pyramid, because</p>	<p>The shape <b>IS</b> a pyramid, because <b>it has one point at the top.</b></p>	1.G.A.1
13	<p>Circle <b>is</b> OR <b>is not</b> and then complete the sentence.</p>  <p>This shape <b>IS</b> / <b>IS NOT</b> a pyramid, because</p>	<p>The shape <b>IS NOT</b> a pyramid, because <b>it has round sides so it's a cone.</b></p>	1.G.A.1
14	<p>Marco gives clues about a shape.</p> <ul style="list-style-type: none"> <li>• The shape has a point at the top</li> <li>• The shape is flat</li> <li>• The shape has 3 sides</li> </ul> <p>Is Marco describing a pyramid? Why or why not?</p>	<p><i>Explanations will vary.</i></p> <p>Example answer: No, Marco is not, because a pyramid is not flat.</p>	1.G.A.1
15	<p>Jayce is answering questions about a shape.</p> <ul style="list-style-type: none"> <li>• Does it have one point at the top? Yes.</li> <li>• Does it have round sides? No.</li> <li>• Is it flat? No.</li> </ul> <p>Could the shape be a pyramid? Why or why not?</p>	<p><i>Explanations will vary.</i></p> <p>Example answer: Yes, because all of Jayce's answers describe a pyramid.</p>	1.G.A.2

## Do you have a group of students who need a boost in math?

Each student could receive a personalized lesson every week from our specialist one-on-one math tutors.

- ✓ Differentiated instruction for each student
- ✓ Aligned to your state's standard
- ✓ Scaffolded learning to close gaps

## Speak to us

-  [thirdspacelearning.com/us/](https://thirdspacelearning.com/us/)
-  +1 929-298-4593
-  [hello@thirdspacelearning.com](mailto:hello@thirdspacelearning.com)



**THIRD SPACE**  
LEARNING